




Name : Class :

Fractions

Half - Thirds - Quarters

Which expression best suits the following divisions ?

Tick the correct answer ☒




	$1/2 = \text{half}$ <input type="checkbox"/>
	$1/3 = \text{one third}$ <input type="checkbox"/>
	$1/4 = \text{one quarter}$ <input type="checkbox"/>
	$1/2 = \text{half}$ <input type="checkbox"/>
	$1/3 = \text{one third}$ <input type="checkbox"/>
	$1/4 = \text{one quarter}$ <input type="checkbox"/>
	$1/2 = \text{half}$ <input type="checkbox"/>
	$1/3 = \text{one third}$ <input type="checkbox"/>
	$1/4 = \text{one quarter}$ <input type="checkbox"/>

Fractions

Half - Thirds - Quarters

Which expression best suits the following divisions?

Tick the correct answer ☒

	$\frac{1}{2} = \text{half}$ <input checked="" type="checkbox"/>
	$\frac{1}{3} = \text{one third}$ <input type="checkbox"/>
	$\frac{1}{4} = \text{one quarter}$ <input type="checkbox"/>
	$\frac{1}{2} = \text{half}$ <input checked="" type="checkbox"/>
	$\frac{1}{3} = \text{one third}$ <input type="checkbox"/>
	$\frac{1}{4} = \text{one quarter}$ <input type="checkbox"/>
	$\frac{1}{2} = \text{half}$ <input type="checkbox"/>
	$\frac{1}{3} = \text{one third}$ <input checked="" type="checkbox"/>
	$\frac{1}{4} = \text{one quarter}$ <input type="checkbox"/>