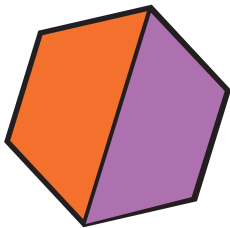


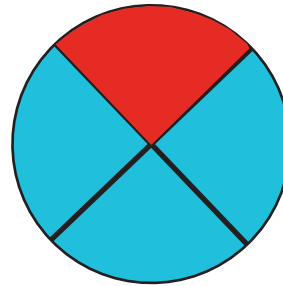
Name : ..... Class : .....

## Fractions

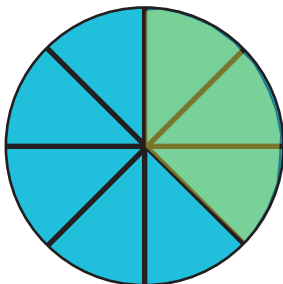
Which fraction do the shaded areas represent ?



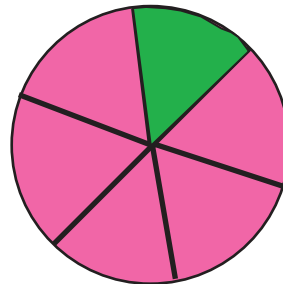
1.




2.




3.



4.



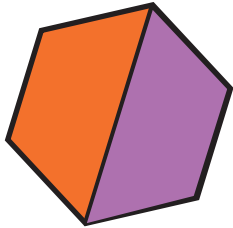
5.



6.

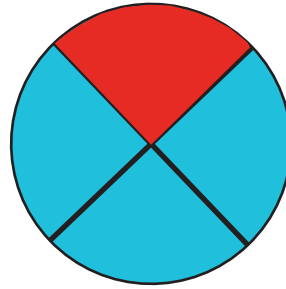
## Answers

Which fraction do the shaded areas represent ?



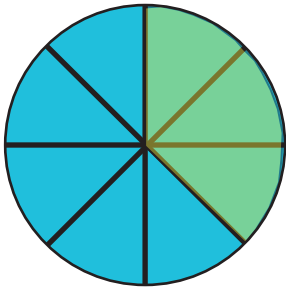
1.

$\frac{1}{2}$



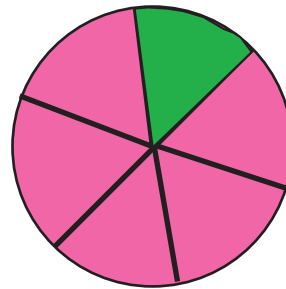
2.

$\frac{1}{4}$




3.

$\frac{3}{8}$




4.

$\frac{1}{6}$



5.

$\frac{2}{8}$



6.

$\frac{1}{2}$