




Name : Class :

Fractions

Which expression suits the following divisions ?

Tick the correct answer ☒

	$\frac{1}{2} = \text{half}$ <input type="checkbox"/>
	$\frac{1}{3} = \text{one third}$ <input type="checkbox"/>
	$\frac{1}{4} = \text{one quarter}$ <input type="checkbox"/>
	$\frac{1}{2} = \text{half}$ <input type="checkbox"/>
	$\frac{1}{3} = \text{one third}$ <input type="checkbox"/>
	$\frac{1}{4} = \text{one quarter}$ <input type="checkbox"/>
	$\frac{1}{2} = \text{half}$ <input type="checkbox"/>
	$\frac{1}{3} = \text{one third}$ <input type="checkbox"/>
	$\frac{1}{4} = \text{one quarter}$ <input type="checkbox"/>