



Name : Class :

Measurements

Length and height



1) How long is this fish ?




2) How long is this arrow ?




3) What is the height of this tree ?

Answers

Length and height

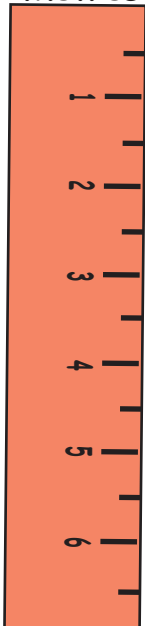


1.) How long is this fish ? 4 cm



2.) How long is this arrow ? 6 1/2 cm

Metres



3.) What is the height of this tree ? 5 m