

Name: _____

Class: _____

Money

Add the coins.

1.



2.



3.



4.



5.



6.






Class: _____

Money

Add the coins.

1.       = \$9.01

2.      = \$5.01

3.    = \$0.55

4.       = \$1.38

5.       = \$7.50

6.     = \$1.21