

Name: _____

Class: _____

Money

Add the coins.

1.



= _____

2.



= _____

3.



= _____

4.



= _____

5.



= _____

6.






= _____

Class: _____

Money

Add the coins.

1.    = £0.80

2.       = £3.44

3.     = £1.40

4.      = £3.54

5.      = £3.42

6.      = £3.08